

ALL KERALA BHAVAN'S SCHOLARSHIP EXAMINATION 2021-22

STD: IX

Duration : 2hrs

Max. Marks: 100

GENERAL INSTRUCTIONS

Read the instructions carefully before answering

- 1. Please fill up your Roll No. and class in the box provided on the OMR sheet.**
- 2. This question booklet contains 50 questions and 5 Tie Breaker questions. All questions including 'Tie Breaker Questions are mandatory.**
Tie Breaker questions will be evaluated only in case of a Tie.
- 3. Each question carries 2 marks.**
- 4. Each question has 4 answer choices a,b,c,d.**
- 5. For each question, select the best/correct option and darken the bubble completely against the corresponding question in the OMR sheet provided.**
- 6. Use a blue/black ball point pen to darken the bubble.**
- 7. Darken only one bubble against each question.**
- 8. There will be no negative marking.**

Choose the correct answer from the options given.

1) My aunt, who is __ engineer works for __ European company.

- | | |
|------------|-----------|
| a) the, an | b) a, an |
| c) an, a | d) an, an |

2) Timely action often prevents some great loss or harm that could occur in the future. 'Choose the apt proverb for the above explanation.

- a) A stitch in time saves nine
- b) Time and thinking tame the strongest grief
- c) Time flies when you're having fun
- d) Time heals all wounds

BVM ELAMAKKARA

3) I'm 'on cloud nine' when I heard the news that the school will reopen soon. The underlined phrase means

- a) to be extremely sad or depressed
- b) to be extremely happy or delighted
- c) to fly an aeroplane
- d) to take a short flight

4) Read the following passage and select the correct option

The police was completely clueless. No one could give them any lead in the case. Sahil returned back to normal and looked at the video intently. He could see the number plate clearly....

- a) The word 'back' should be changed to the 'way'
- b) The word 'back' should be deleted
- c) The word 'clearly' should be deleted
- d) The word 'completely' should be changed to 'finally'

5) Choose the correctly spelt word.

- a) reccomendation
- b) recommendation
- c) recomendation
- d) recommendation

6) Choose the right option.

Vijay's partner threw cold water on his scheme.

- a) encouraged
- b) discouraged
- c) appreciated
- d) disagreed

7) Tired of playing second fiddle, she resigned and started her own company.

- a) to be happy, cheerful and healthy
- b) to do back seat driving
- c) to support the role and view of another person
- d) to reduce importance of one's senior

8) Which of the following equations represent a line parallel to Y axis

- a) $2y=5x$ b) $2y=5$ c) $2x=5$ d) $2x + 3y= 5$

BVM ELAMAKKARA

- 9) One of the factor of $(16y^2-1)+(1-4y)^2$ is
- a) $(4+y)$ b) $(4-y)$ c) $(4y+1)$ d) $8y$
- 10) $\frac{x}{y} + \frac{y}{x} = -1$ ($x, y \neq 0$) then the value of $x^3 - y^3$ is
- a) $1/2$ b) 1 c) -1 d) 0
- 11) The perimeter of a rhombus is 20 cm. If one of its diagonals is 6cm, then its area is
- a) 28cm^2 b) 36cm^2 c) 24cm^2 d) 20cm^2
- 12) Degree of zero polynomial is
- a) 0 b) 1 c) Any natural number d) Not defined
- 13) If the measure of an angle is twice the measure of its supplementary angle, then the measure of the angle is
- a) 60° b) 90° c) 120° d) 130°
- 14) A point $(x+2, x+4)$ lies in the first quadrant. Its mirror image with respect to x-axis is $(5, -7)$. The value of x is
- a) -9 b) 3 c) -3 d) 7
- 15) Find the value of $\sqrt[3]{216} - \sqrt[3]{125}$
- a) 1 b) 0 c) -1 d) 2
- 16) If the area of an equilateral triangle is $16\sqrt{3}\text{ cm}^2$, then the perimeter of the triangle is
- a) 48 cm b) 24 cm c) 12 cm d) 306cm

17) A Ball of mass m_1 travelling with a velocity u_1 collides with another Ball B of mass m_2 at rest. After collision the velocity of Ball A changes to v_1 and velocity of Ball B changes to v_2 . If the momentum is conserved, which option correctly relates the momentum before and after the collision?

- a) $(m_1.u_1) + (m_1.v_1) = (m_2.v_2)$
- b) $(m_1.u_1) = (m_1.v_1) + (m_2.v_2)$
- c) $(m_1.v_2) - (m_1.u_1) = (m_1.v_1)$
- d) $(m_1.u_1) = (m_1.v_1) - (m_2.v_2)$

18) Himanshu wants to separate two photosynthetic pigments P and Q from the plant extract. He uses paper chromatography for the separation of these pigments and observes pigment P is separated first. What can be a likely reason for the same?

- a) Pigment P has the low density.
- b) Pigment Q has the high density.
- c) Pigment P is more soluble in water and rises faster.
- d) Pigment Q is more soluble in water and rises slower.

19) The formula of hydrogen carbonate of a metal M is $M(\text{HCO}_3)_2$. Give the formula of metal carbonate

- a) MCO_3
- b) M_2CO_3
- c) $\text{M}(\text{CO}_3)_2$
- d) M_3CO_3

20) During summer, leaves of a potted plant droop when the soil becomes dry. Which cell organelle makes the leaves droop?

- a) Nucleus, as it stops making DNA
- b) Cell wall, as it starts to shrink
- c) Lysosome, as it releases the digestive enzymes
- d) Vacuole, as it loses all the water

27) When on election duty, under whose control does the government officers work?

- a) Central Government
- b) Election Commission
- c) District Magistrate
- d) District Court

28) Majuli is a riverine island located in the river

- a) Ganga b) Brahmaputra c) Yamuna d) Kaveri

29) National Anthem of France is

- a) Vande Mataram
- b) Roget de L' Isle
- c) Le Moniteur Universal
- d) Marseilles

30) What is the aim of Sarva Siksha Abhiyan?

- a) To provide elementary education
- b) To provide elementary education to the rural poor
- c) To provide elementary education to all children in the age group 6-14 years.
- d) To provide elementary education to the urban poor.

31) The Northern plains has been formed by the interplay of three major river system namely

- a) The Indus- Ganga- Brahmaputra
- b) Yamuna- Mahanadi- Narmada
- c) Indus – Beas – Sutlej
- d) Narmada – Chambal – Indus

32) Assertion: In India, people elect their own representative.

Reason: India is a democracy.

a) Both Assertion and Reason are true and Reason is the correct explanation of Assertion

b) Both Assertion and Reason are true but Reason is not the correct explanation of Assertion

c) Assertion is true and Reason is false

d) Assertion is false but Reason is true

33) Which of the following is included in the secondary sector?

a) Poultry farming

b) Manufacturing

c) Transportation

d) Quarrying

34) Which of the following statements is false about the Third estate?

a) The third estate was made of the poor only

b) Within the Third estate some were rich and some were poor

c) Richer members of the Third estate owes the land

d) Peasants are obligated to serve in the army, or build roads.

35) Arribada is a term related to the mass migration of _____ species

a) Snake

b) Sea turtle

c) Frog

d) Spider

- 36) What is the name of the rare Martian Mineral, which has been recently discovered in Antarctic ice?
- a) Jarosite
 - b) Carnotite
 - c) Johannsenite
 - d) Ilmenite
- 37) Which sports personality is leading the UNICEF Global Vaccination Initiative?
- a) Usain Bolt
 - b) Cristiano Ronaldo
 - c) David Beckham
 - d) Roger Federer
- 38) Where did Prime Minister Narendra Modi inaugurate 143 year old reconstructed Heritage Marie Building?
- a) Chandigarh
 - b) Puducherry
 - c) Chennai
 - d) Jammu
- 39) Which country's border touches the maximum countries?
- a) England
 - b) Russia
 - c) African
 - d) China

40) Which of the following can be arranged into a 5-letter English word ?

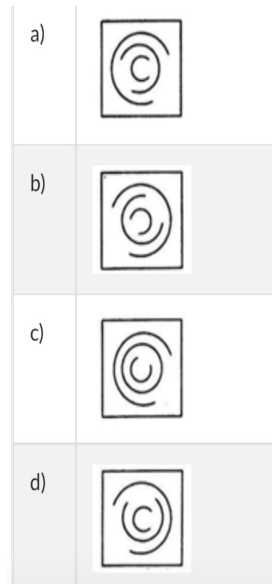
- a) HRGST b) RILSA c) TOOWT d) WQRGS

41) Which one of the choices makes the best comparison ?

PEACH is to HPECA as 46251 is to

- a) 15264 b) 14562 c) 14652 d) 62541

42) In the following figure, choose the odd one out



43) Which word does not belong with other?

- a) Index b) Glossary c) Chapter d) Book

44) Complete the series 7,10,8,11,9,12 ,

- a) 7 b) 12 c) 10 d) 13

BVM ELAMAKKARA

45) Pointing out to a man, Raj said, he is the son of the woman who is the mother of the husband of my mother. Who is the man to Raj?

- a) Grand Son b) Son c) Brother d) Uncle

46) How many 6'S are there in the following sequence which are preceded by 8 but not immediately followed by 4.

4 7 5 6 3 7 8 6 9 1 6 8 4 7 3 4 8 6 3 9 6 7 8 6 4 7 3 5 8 6 1

- a) 5 b) 4 c) 3 d) 6

47) If 3 is called 9, 9 is called 27, 27 is called 81, 81 is called 243, 243 is called 729, 729 is called 2187. Then which of the following is the cube of 9?

- a) 243 b) 729 c) 2187 d) 27

48) Which of the following letter groups will replace the question mark (?) in the series given below

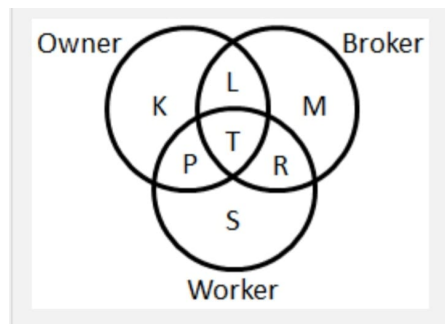
CY DS FN IJ ?

- a) KJ b) MG c) MH d) LG

49) If in a certain code language, 'LAP' is coded as 'KMZBOQ' then how will 'NOTE' be written in that language?

- a). MONPSUFD b). MONPUSDF c). MNOPSUDF d). MONPSUDF

50) The diagram given below represents owner, broker and worker. Identify the region which represents all the three ie. Owner, broker and worker.



- a)L b)T c)P d)R

BVM ELAMAKKARA

TIE-BREAKER

51) The day before yesterday I was 25. Next year I will be 28. This is true only one day in a year. What day is my Birthday?

- a) Dec 31 b) Feb 28
- c) Jan 1 d) Jun 9

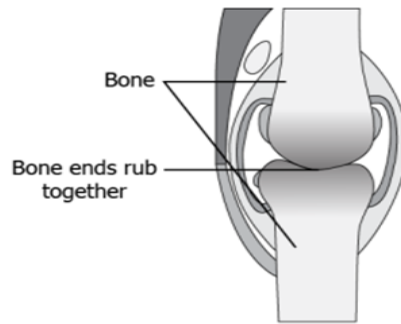
52) Which of the following state has launched the Annapurna Raso Yojna for providing quality meals to the weaker section at subsidized rates?

- a) Uttar Pradesh
- b) West Bengal
- c) Rajasthan
- d) Madhya Pradesh

53) Where is Kalahari desert situated?

- a) African b) American c) Asia d) Europe

54) A student observes image of the knee bones of a person who is suffering from a condition called arthritis due to inflammation of joints. Which connective tissue can be corrected between the bones to ease the movement of joints?



- a) Blood as it contains proteins b) Areolar tissue as it repairs the tissue
- c) Ligament as it joins the two bones easily d) Cartilage as it smoothens surface of the bones

55) Complete this series of numbers :

If $9 = 4$, $21 = 9$, $24 = 10$, $8 = 5$, $100 = 7$, then $16 =$

- a) 12 b) 6 c) 11 d) 7

*****BVM ELAMAKKARA*****